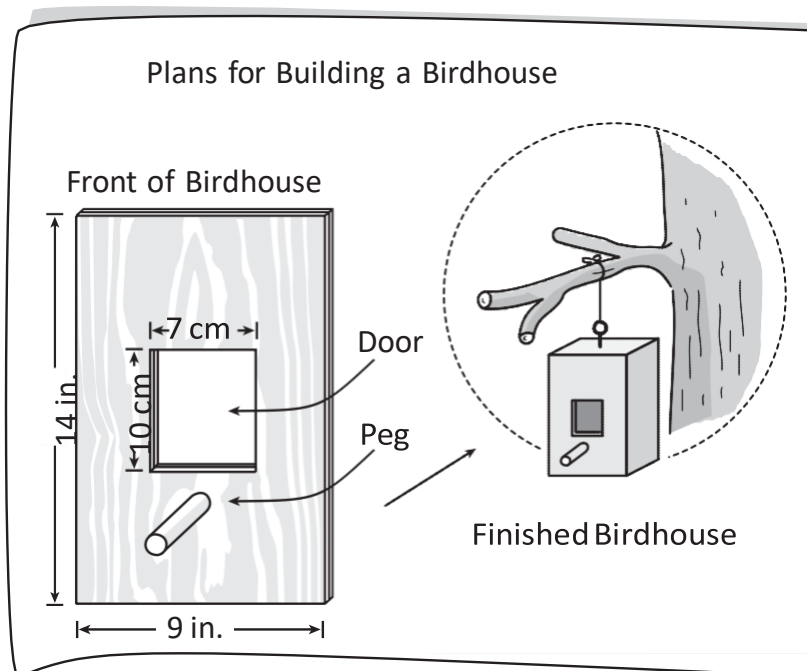


Length Perimeter

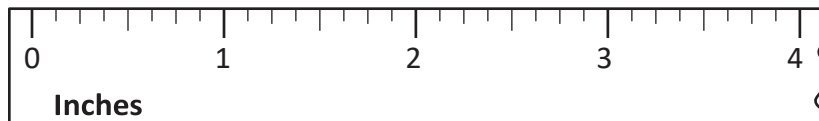

Instructions: Use the picture to answer questions 1 – 5.

Jay and Celia have plans for building a birdhouse.



1. The birdhouse project came with 1 meter of thick string. How many centimeters are in 1 meter?
 - A. 3 centimeters
 - B. 12 centimeters
 - C. 36 centimeters
 - D. 100 centimeters
2. Celia cut 1 yard of rope. How many inches are in 1 yard?
 - A. 12 inches
 - B. 24 inches
 - C. 36 inches
 - D. 100 inches

3. Jay glued the peg below the doorway. How long is the peg?



- A. 2 inches
 - B. $2\frac{1}{2}$ inches
 - C. $3\frac{1}{2}$ inches
 - D. 4 inches
4. The front of the birdhouse is 14 inches tall by 9 inches wide. What is the perimeter of the front of the birdhouse?
- _____
5. The door to the birdhouse is 10 centimeters tall by 7 centimeters wide. What is the perimeter of the door to the birdhouse?
- _____