


COUNTING

INSTRUCTIONS


Circle or fill in the blank with the correct answer.

1. How many crackers are on the plate?

- a. 5
- b. 9
- c. 12
- d. 14



4. The space shuttle crew saw 9 meteors. Draw them all in the box below.



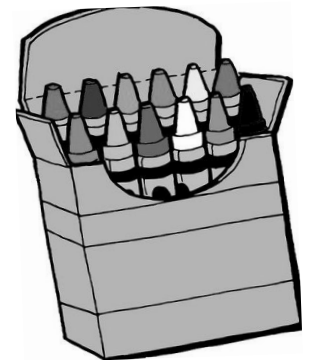
2. Which number comes next?

- a. 46
- b. 50
- c. 84
- d. 8

43, 44, 45,
46, 47, ____

5. How many crayons are in the box?


- a. 7
- b. 10
- c. 12
- d. 20



3. Help the space shuttle blast off!

Counting backward from 10, write in the missing numbers.

10, 9,
8, 7,
____,
____, 4,
3, ____ , ____



6. Write in the missing numbers.

15, 16, 17, 18, ____ ,
____ , 21, 22, ____ ,
____ , 25

7. Write in the missing numbers.

20, 19, 18, 17, ____ ,
____ , 14, 13, ____ ,
____ , ____