
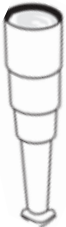




THREE-DIMENSIONAL SHAPES

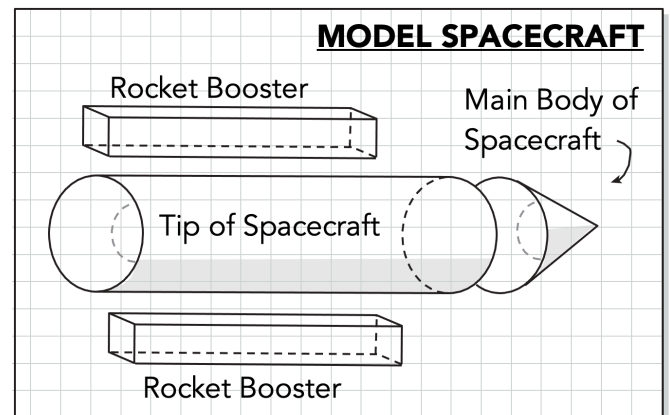
INSTRUCTIONS

Work through questions 1 through 3.

- What shape has no straight sides?
 - cube
 - cylinder
 - cone
 - sphere
- What shape is made up of six square faces?
 - cube
 - cylinder
 - cone
 - sphere
- Which of the following pictures best shows a rectangular prism?
 - 
 - 
 - 
 - 

INSTRUCTIONS

Liz and Derek are building a model of a spacecraft. They are about to glue the rocket booster to the main body.



- How many faces does the rocket booster have?

- How many vertices does the rocket booster have?

- What shape is the rocket booster?
