

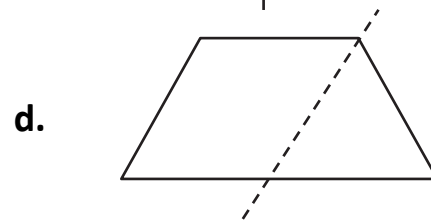
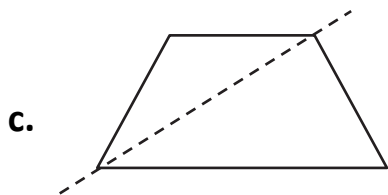
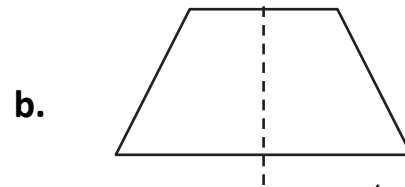
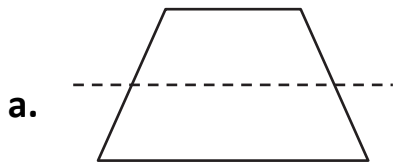
# Symmetry

Instructions: Work through questions 1-3.

1. How many lines of symmetry does a square have?

- a. 1
- b. 2
- c. 3
- d. 4

2. Which of these shows the correct line of symmetry?



3. Draw the other half of this picture:

