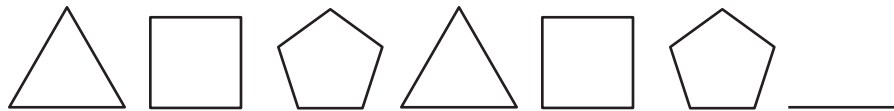


What's Missing?

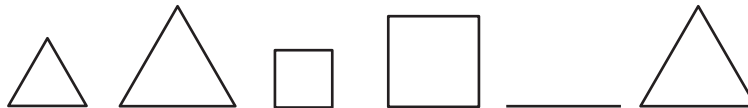
Instructions: Use the information given to answer the questions. Have fun drawing at the end!


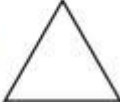


1. What is the next shape in this pattern?




- A. a square
- B. a triangle
- C. a hexagon
- D. an octagon

2. What shape is missing from this pattern?



- A. 
- B. 
- C. 
- D. 

Ryan and Kiah are making bookmarks with stickers.



1. Look at Ryan's bookmark. What is the rule for the pattern on Ryan's bookmark?

Draw the shape that will happen next.

2. Look at Kiah's bookmark. What is the rule for the pattern on her bookmark?

Draw the shape that is missing.