

Figures: Polygons


Directions: Choose the correct answer and fill in the blanks for questions 1 through 5.

1. Which picture is not a polygon?

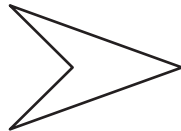
A.




C.



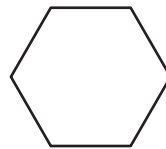
B.



D.



2. Bees build beehives using the shape below. What is this shape?



A. an octagon

B. a hexagon

C. a pentagon

D. a kite

3. Which shape has four equal angles and four equal sides?

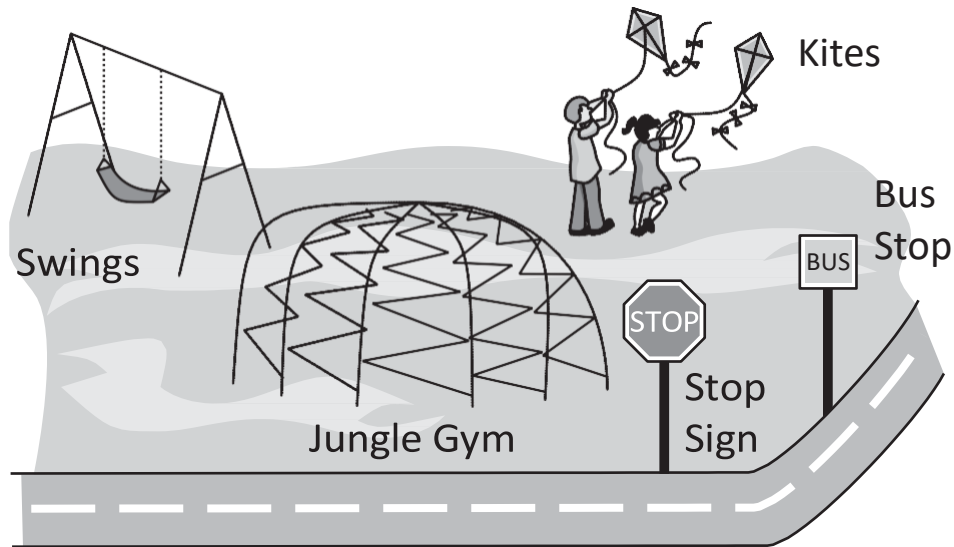
A. a square

B. a triangle

C. a pentagon

D. an octagon

Nick and Marta are walking to the playground.



4. Nick sees many things shaped like triangles in the playground. What are two things at the playground shaped like a triangle?

1) _____

2) _____

5. Marta sees many different shapes and describes them to Nick. What things in the playground is she describing?

8 angles and 8 sides:

4 square angles and 4 equal sides:

4 angles and 4 sides:
