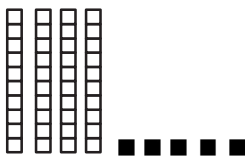


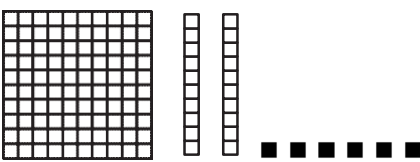
# COUNTING BY TENS

## INSTRUCTIONS

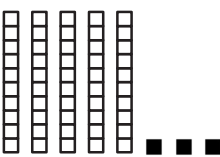
Circle the number shown by the base-ten blocks.

1. 

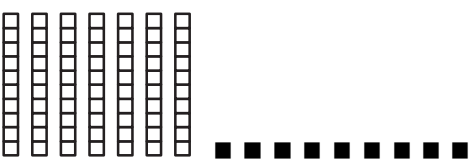
a. 5    b. 54    c. 40    d. 45

2. 

a. 62    b. 162    c. 126    d. 26

3. 

a. 23    b. 53    c. 35    d. 61

4. 

a. 79    b. 97    c. 68    d. 56

5. Find the number in the tens place.

<u>1</u>	<u>7</u>	<u>8</u>
hundreds	tens	ones

- a. 8    b. 7    c. 1    d. 0

6. Write a number that has an **8** in the tens place.

_____	_____	_____
hundreds	tens	ones

7. Circle the number in the ones place. Underline the number in the tens place. Draw a box around the number in the hundreds place.

**1 3 9**